



Noah's Ark Independent Primary School

Subject: History	Examiner: Tinobayana, J.
Type: End of Term Three	Moderator: Rwizi, A
Date: 6 October 2020	Grade: 5-____
Marks: 50 Marks	Time: 1 hour 15 minutes

Name: _____

Instructions:

Answer ALL the questions in the spaces provided.

Write neatly and legibly

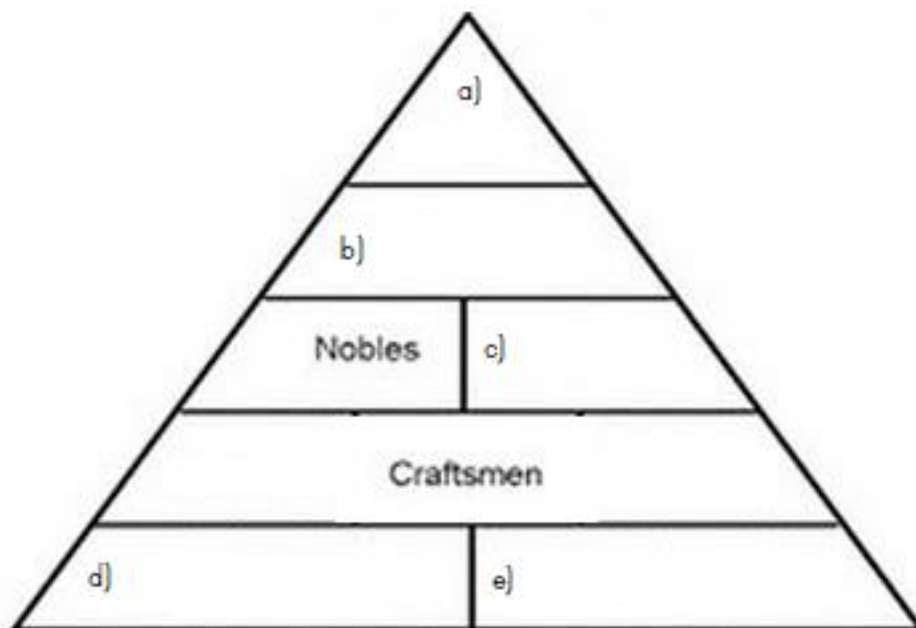
Carefully read all questions before answering

1. Define the following words (2)

1.1 ancient: _____

1.2 lifeblood: _____

2. Label the five levels to show how Egyptian society was organised. (5)



3. Explain why the Nile River was so important to Ancient Egyptian society. (4)

4. List four things Ancient Egyptians used for maths. (4)

4.1 -----

4.2 -----

4.3 -----

4.4 -----

5. Use the words from the word bank to complete the paragraph below. (4)

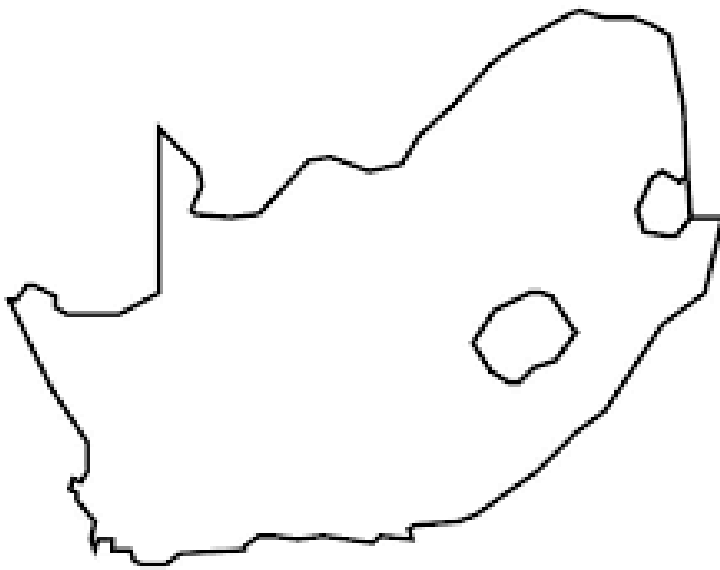
Word Bank			
fields	crops	permanent	iron

Farmers lived in _____ settlements. They made tools from _____. The tools helped them to make _____ and grow _____.

6. Give reasons that led to the San and Khoikhoi to have left evidence that they have lived in all provinces of South Africa. (5)

7. Explain what kind of evidence helped the historians to find out that the Khoikhoi lived in different areas. (4)

8. Use the map below to complete the following questions.

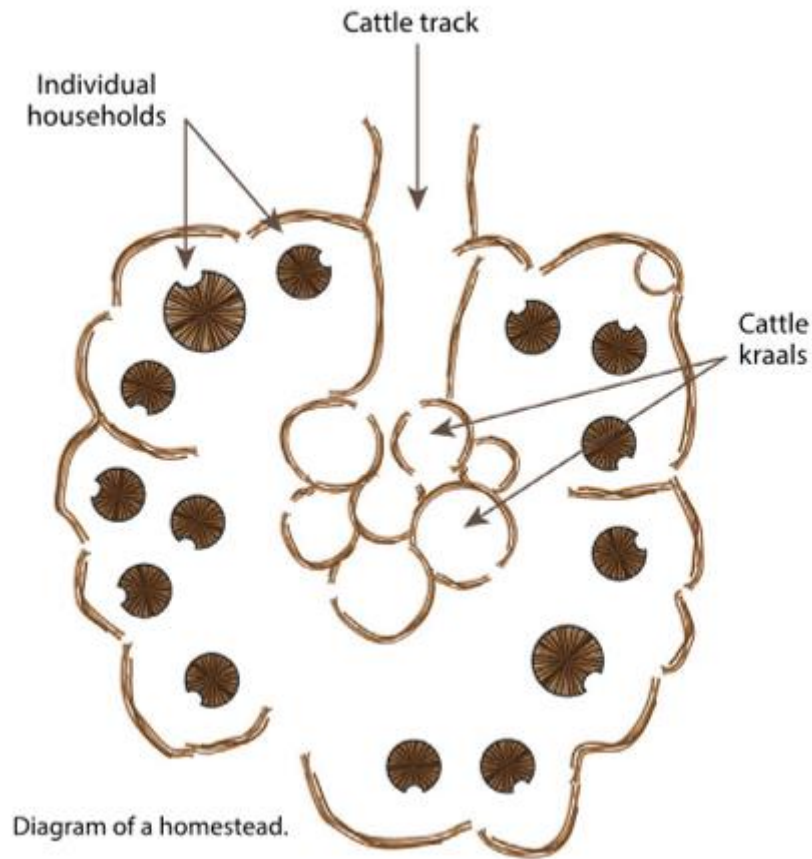


Key	
	Areas that receive summer rainfall
	Area that have winter rainfall.

8.1 On the map above, draw lines (as shown on the key), that reveal the areas that the African farmers settled. (2)

8.2 Briefly explain why the African farmers chose to live in these areas. (4)

9. Study the picture below then answer the questions which follow.



Source: Platinum Social Science Grade 5 Learner's Book, page 115.

9.1 The cattle kraals had to be placed in the centre of the homestead. Support the statement using your own knowledge. (5)

10. Suggest some reasons why African farmers settled and were not nomadic. (5)

11. Briefly explain the roles of each of the following members of the village in early farming societies.

11.1 boys (2)

11.2 women (2)

12. Give examples of two things that were invented in Egypt. (2)

12.1 -----

12.2 -----

____ / 50 Marks